

# Music Theory

## Test for Level One (Answer Key)

1. Fill in the blanks with words from the list below. (16 marks)

ascending	four	itches
bass	higher	seven
descending	lower	two
eight	octave	treble

\* Note names are not included in this list.

a) What are the seven note names used in the musical alphabet?

  A     B     C     D     E     F     G  

b) What is another word that means 'going higher'?   Ascending  

c) What do we call the distance from one A to the next closest A?

  Octave  

d) How many notes are there in an octave?   Eight  

e) As we move *backwards* through the different letter names, do the notes sound higher or lower?   Lower  

f) Which type of clef do we usually use to write *high* notes?   Treble  

g) What word can you spell with the treble clef spaces?

  F     A     C     E

2. Match the definitions to the correct term by drawing lines. (9 marks)

Treble Clef

Piano

Mezzo forte

Staff

Line note

Forte

Bass Clef


Space note


Mezzo piano

*mp*


**B**

*f*







*mf*



*p*




3. Label the following notes. (20 marks)




A musical staff in treble clef with five measures. Each measure contains a single note: C (first space), F (second space), D (third space), A (fourth space), and E (first space above the staff).

  C          F          D          A          E  




A musical staff in treble clef with five measures. Each measure contains a single note: A (first space), G (second space), D (third space), G (second space below the staff), and B (first space above the staff).

  A          G          D          G          B  



A musical staff in bass clef with five measures. Each measure contains a single note: D (second space), A (second space), C (third space), E (first space below the staff), and F (second space below the staff).

  D          A          C          E          F  



A musical staff in bass clef with five measures. Each measure contains a single note: C (second space below the staff), G (second space), B (third space), A (second space), and D (third space above the staff).

  C          G          B          A          D

4. Write the following notes in any octave. (20 marks)

A musical staff with a treble clef. It contains five notes: F (first space), C (second line, beamed to the first space), D (second space), G (third space, beamed to the second space), and B (third line, beamed to the second space).

F C D G B

A musical staff with a bass clef. It contains five notes: E (first space), G (second space), B (second space, beamed to the first space), A (third space), and C (third space, beamed to the second space).

E G B A C

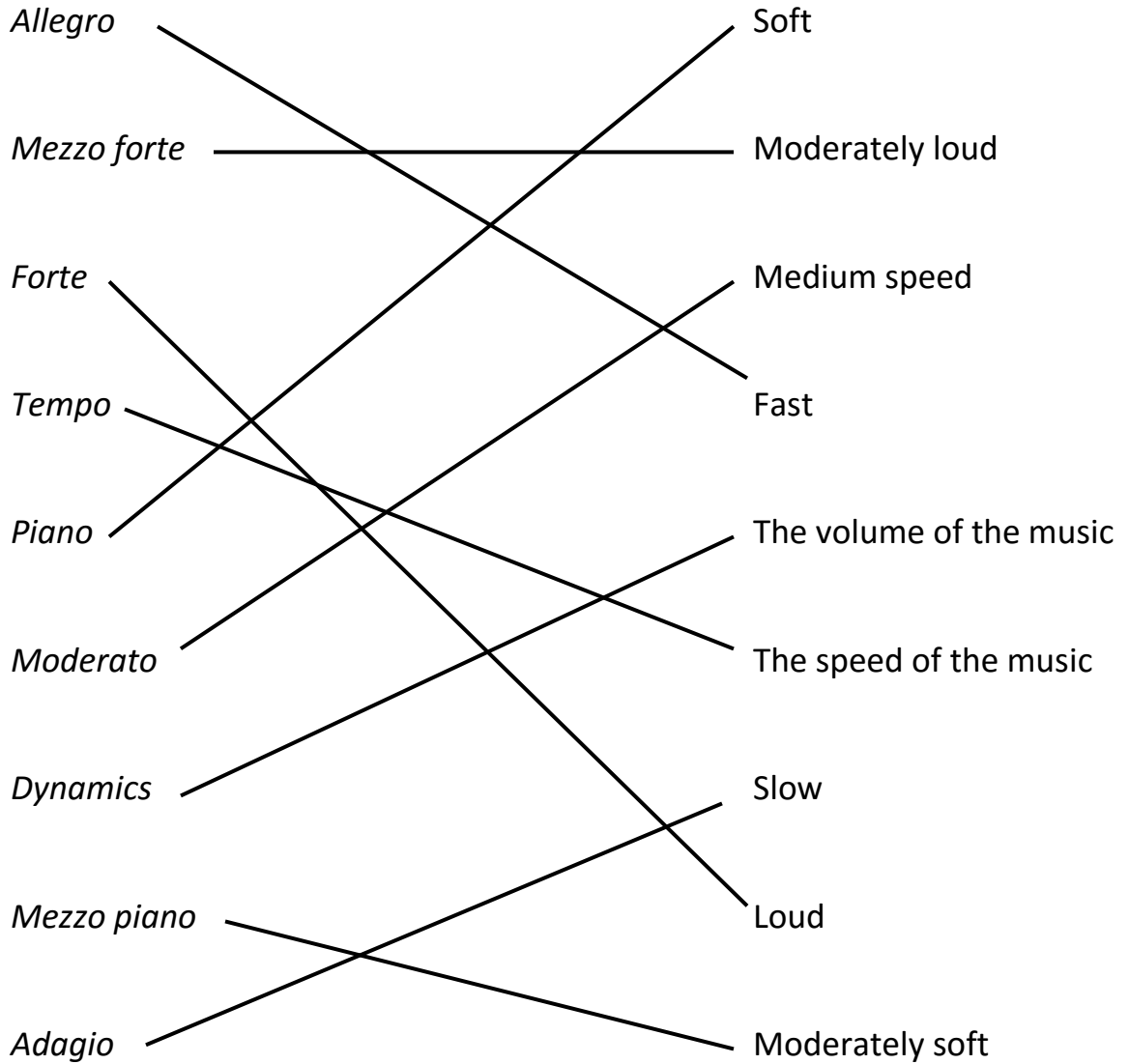
A musical staff with a treble clef. It contains five notes: A (first space), E (second space), F (second space), C (third space, beamed to the second space), and G (third space, beamed to the second space).

A E F C G

A musical staff with a bass clef. It contains five notes: F (first space), D (second space), E (second space, beamed to the first space), A (third space), and G (third space, beamed to the second space).

F D E A G

5. Match the definitions to the correct term by drawing lines. (9 marks)



MUSIC THEORY - Answer Sheet LV1



\*230-300-3010\*